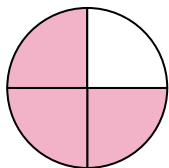




Determine which letter best describes the shaded portion.


Answers

1)



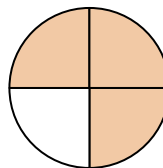
- A. three-quarters
B. one-quarter
C. two-halves

2)




- A. three-quarters
B. one-quarter
C. two-halves

3)



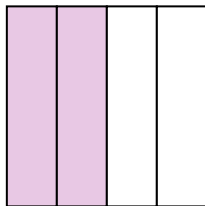
- A. one-fourth
B. four-quarters
C. three-quarters

4)



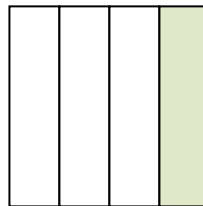
- A. one-fourth
B. two-halves
C. one-half

5)



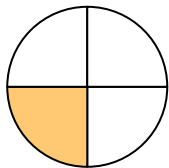
- A. three-fourths
B. two-halves
C. two-quarters

6)



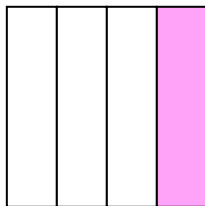
- A. one-fourth
B. two-halves
C. two-quarters

7)




- A. four-fourths
B. three-fourths
C. one-fourth

8)




- A. three-fourths
B. one-quarter
C. one-half

9)



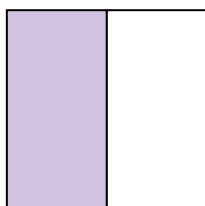
- A. one-half
B. four-quarters
C. one-fourth

10)



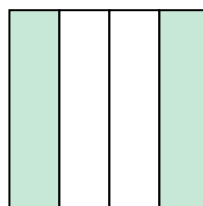
- A. one-half
B. three-fourths
C. two-halves

11)



- A. two-halves
B. one-half
C. one-quarter

12)



- A. three-fourths
B. one-fourth
C. two-quarters

1. _____

2. _____

3. _____

4. _____

5. _____

6. _____

7. _____

8. _____

9. _____

10. _____

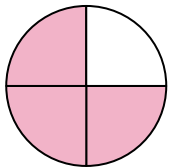
11. _____

12. _____




Determine which letter best describes the shaded portion.

1)



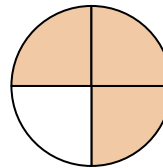
- A. three-quarters
B. one-quarter
C. two-halves

2)




- A. three-quarters
B. one-quarter
C. two-halves

3)



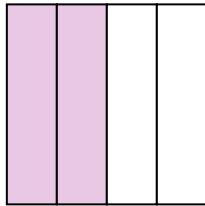
- A. one-fourth
B. four-quarters
C. three-quarters

4)



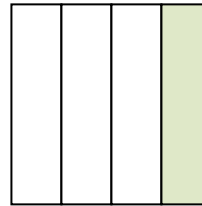
- A. one-fourth
B. two-halves
C. one-half

5)



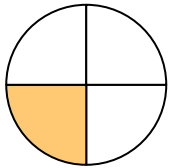
- A. three-fourths
B. two-halves
C. two-quarters

6)



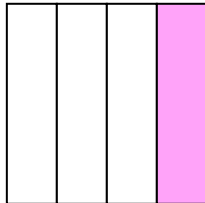
- A. one-fourth
B. two-halves
C. two-quarters

7)




- A. four-fourths
B. three-fourths
C. one-fourth

8)



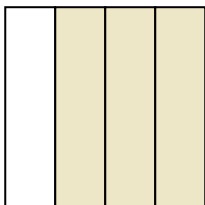
- A. three-fourths
B. one-quarter
C. one-half

9)




- A. one-half
B. four-quarters
C. one-fourth

10)



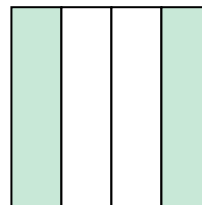
- A. one-half
B. three-fourths
C. two-halves

11)



- A. two-halves
B. one-half
C. one-quarter

12)



- A. three-fourths
B. one-fourth
C. two-quarters

Answers

1. **A**
2. **C**
3. **C**
4. **B**
5. **C**
6. **A**
7. **C**
8. **B**
9. **A**
10. **B**
11. **B**
12. **C**